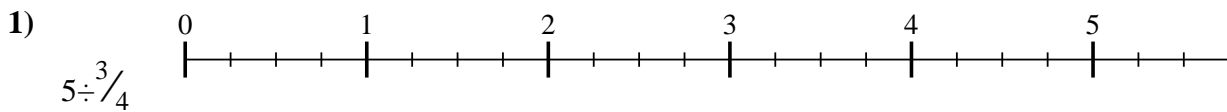


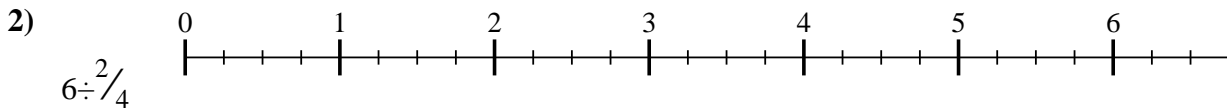


Use the numberline to solve each problem. The first is marked for you.

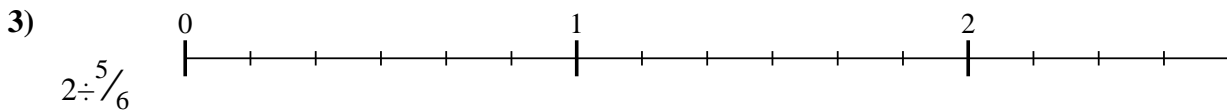
**Answers**



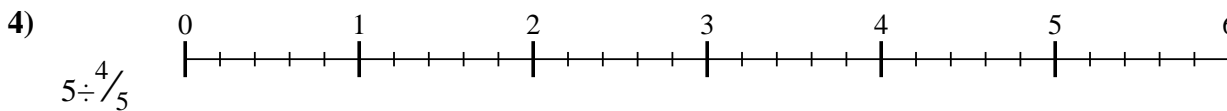
1. \_\_\_\_\_



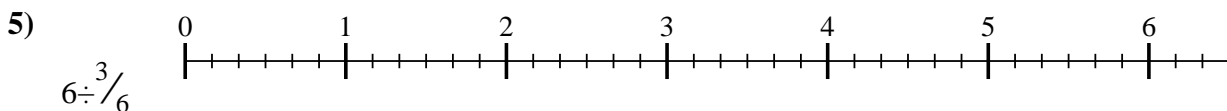
2. \_\_\_\_\_



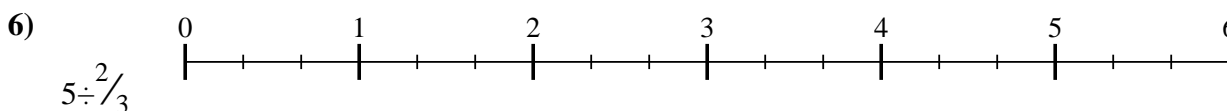
3. \_\_\_\_\_



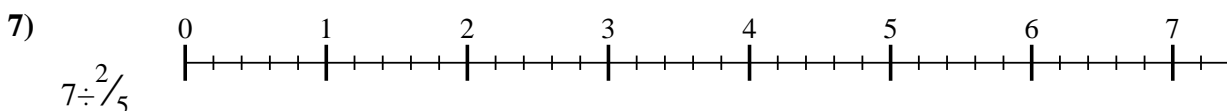
4. \_\_\_\_\_



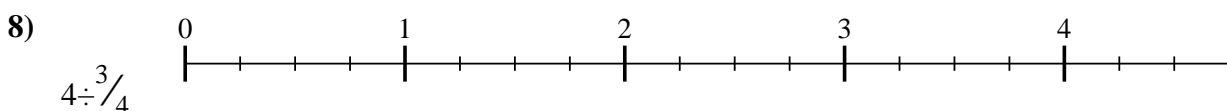
5. \_\_\_\_\_



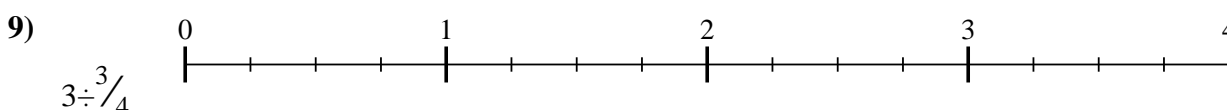
6. \_\_\_\_\_



7. \_\_\_\_\_



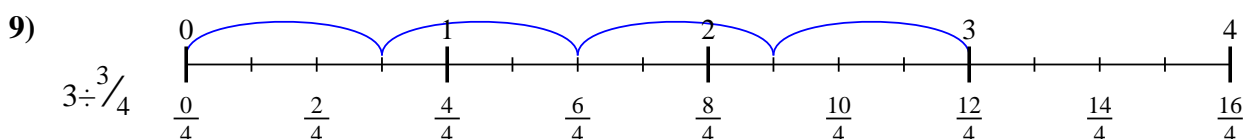
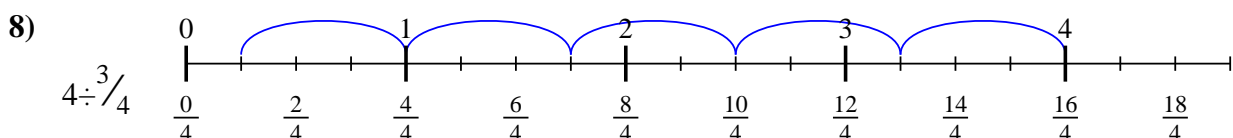
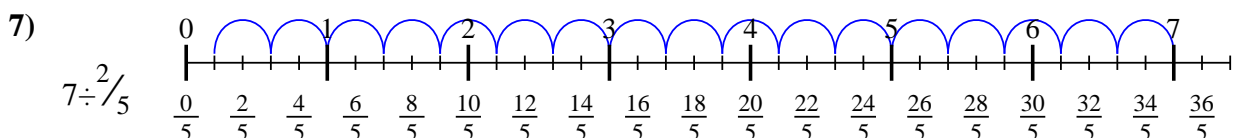
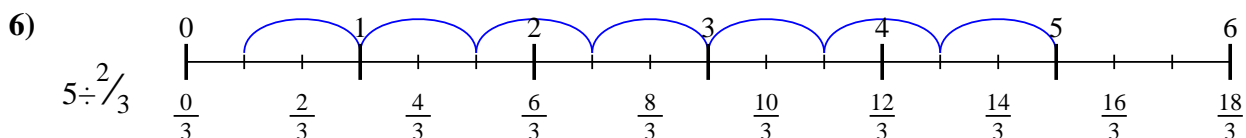
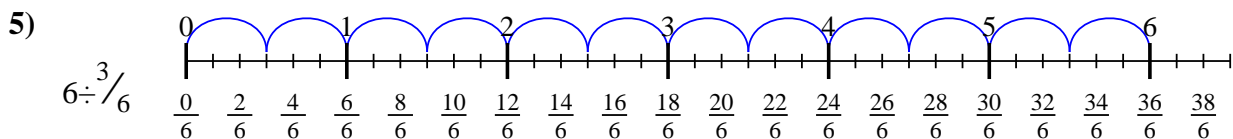
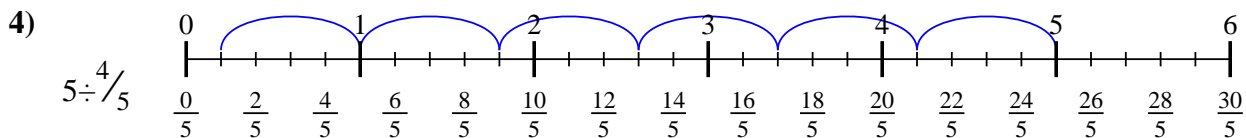
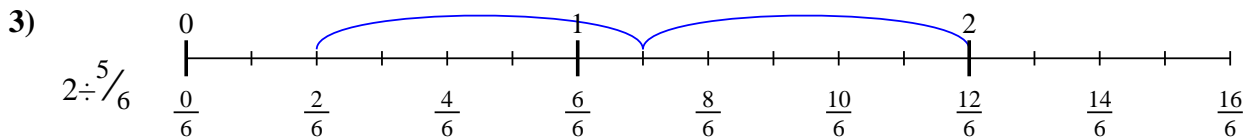
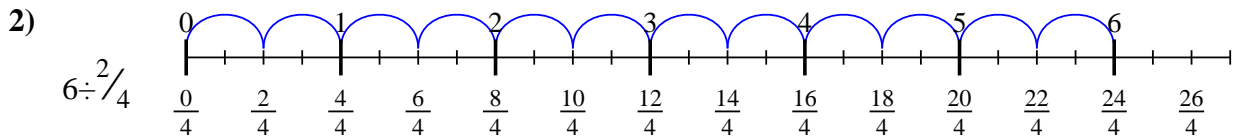
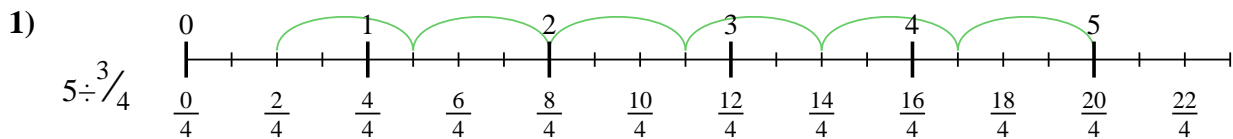
8. \_\_\_\_\_



9. \_\_\_\_\_



Use the numberline to solve each problem. The first is marked for you.



**Answers**

1.  $\frac{20}{3}$

2.  $\frac{24}{2}$

3.  $\frac{12}{5}$

4.  $\frac{25}{4}$

5.  $\frac{36}{3}$

6.  $\frac{15}{2}$

7.  $\frac{35}{2}$

8.  $\frac{16}{3}$

9.  $\frac{12}{3}$



Use the numberline to solve each problem. The first is marked for you.

**Answers**

1)

1. \_\_\_\_\_

2)

2. \_\_\_\_\_

3)

3. \_\_\_\_\_

4)

4. \_\_\_\_\_

5)

5. \_\_\_\_\_

6)

6. \_\_\_\_\_

7)

7. \_\_\_\_\_

8)

8. \_\_\_\_\_

9)

9. \_\_\_\_\_